

Wednesday - Activity 1

Activity 1 Order Numbers


Here are three digit cards.
What is the greatest number you can make?
What is the smallest number you can make?



How do you know you have created the greatest/smallest?

Activity 1 Order Numbers

Here are three digit cards.
What is the greatest number you can make?
What is the smallest number you can make?



Activity 1

Order Numbers


Here are three digit cards.
What is the greatest number you can make?
What is the smallest number you can make?



Activity 1

Order Numbers

Use the symbols $<$, $>$ or $=$ to make the statement correct.



102

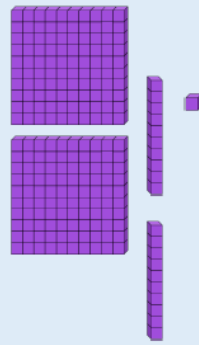


What number is being represented by the place value counters/Base 10?

Activity 1

Order Numbers

Use the symbols $<$, $>$ or $=$ to make the statement correct.



207