
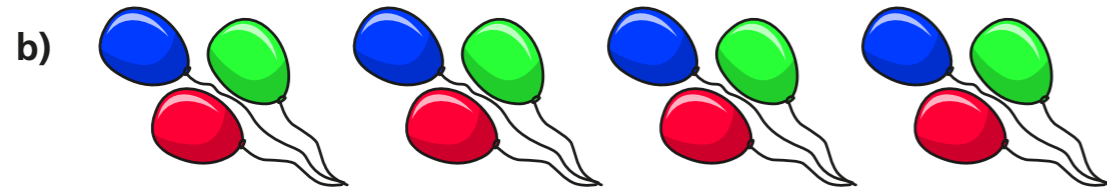


The 4 times-table

1 Complete the multiplication.



$$\square \times \square = \square$$



$$\square \times \square = \square$$

2 Complete the number sentences.

a) $6 \times 4 = \square$

g) $24 \div 4 = \square$

b) $4 \times 3 = \square$

h) $8 \div 4 = \square$

c) $\square = 7 \times 4$

i) $0 \div 4 = \square$

d) $4 \times \square = 48$

j) $\square \div 11 = 4$

e) $0 \times 4 = \square$


k) $\square \div 4 = 5$

f) $4 \times 9 = \square$

l) $1 \times 4 = \square$

3 What multiplication and division statements does the array represent?

Complete the statements.



$$\square \times \square = \square$$

$$\square \times \square = \square$$

$$\square \div \square = \square$$

$$\square \div \square = \square$$

4 Complete the number sentences.

a) $2 \times 4 = \square$

c) $3 \times 4 = \square$

$4 \times 4 = \square$

$3 \times 8 = \square$

$8 \times 4 = \square$

$3 \times 12 = \square$

b) $8 = 4 \times \square$

$16 = 4 \times \square$

$32 = 4 \times \square$

What patterns do you notice?



5 Write $<$, $>$ or $=$ to compare the statements.

a) $48 \div 12$ 4

d) $4 \div 4$ 4×4

b) 36 $40 \div 4$

e) 1×4 4×1

c) $16 \div 4$ 4×4

f) 4×2 $32 \div 4$

6 A paper clip is 4 cm long.



How long are 6 of these paper clips?

7 Dexter buys 10 mugs and 4 key rings.
How much money does he spend in total?



8 The pictogram shows the animals a group of children have as pets.

Complete the pictogram.

Animal	Pictogram	Number of animals
cat		
dog		28
bird		
mouse		

= 4 animals

9

Who is correct? _____

How do you know? Talk about it with a partner.