


Name: _____

Date: _____

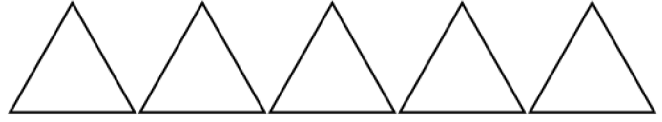
End of Lesson Quiz

1: How many sides do three squares have in total?




- 12
- 8

2: How many sides do five triangles have in total?



- 5
- 15

3: How many sides do four rectangles have in total?



- 12
- 16

Last updated: Thursday, June 24, 2021 1:16 PM

