

Maths

To share a total equally between a set number of groups

Independent Task

Miss Sidhu



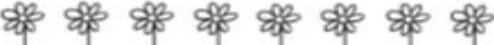



Independent Task 1

How many objects are in each group?

Remember to draw one and then cross it out from the top.


You may want to use objects to help you.

									
<input type="text"/>	<input type="text"/>								
There are <input type="text"/> cakes in each group.									
									
<input type="text"/>	<input type="text"/>	<input type="text"/>							
There are <input type="text"/> pears in each group.									
									
<input type="text"/>	<input type="text"/>	<input type="text"/>	<input type="text"/>						
There are <input type="text"/> flowers in each group.									
									
<input type="text"/>					<input type="text"/>				
There are <input type="text"/> glasses in each group.									




Independent Task 1 Answers


How many
objects are in
each group?




There are cakes in each group.



There are pears in each group.



There are flowers in each group.



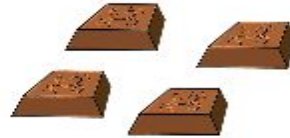
There are glasses in each group.



Challenge

True or false? Explain your answer.

I have divided my chocolate fairly into four groups. Each group has three pieces of chocolate.



Challenge

True or false? Explain your answer.

Answers

I have divided my chocolate fairly into four groups. Each group has three pieces of chocolate.



False because the boy has divided his chocolate into three groups instead of four groups. Each group has four pieces of chocolate instead of three pieces.

