


Name: \_\_\_\_\_

Date: \_\_\_\_\_

## To identify one half of a shape


1: Is the slice cut in half?



Yes

No


2: Is the slice cut in half?



Yes

No


3: Is the slice cut in half?



Yes

No

4: Is the slice cut in half?



Yes

No

Last updated: Thursday, June 24, 2021 1:16 PM

