


Name: _____

Date: _____


To find half of a quantity

1: Do Anansi and Turtle have an equal share?




- Yes
- No

2: Do Anansi and Turtle have an equal share?




- Yes
- No

3: Do Anansi and Turtle have an equal share?



- Yes
- No

4: Do Anansi and Turtle have an equal share?



- Yes
- No

Last updated: Thursday, June 24, 2021 1:16 PM

