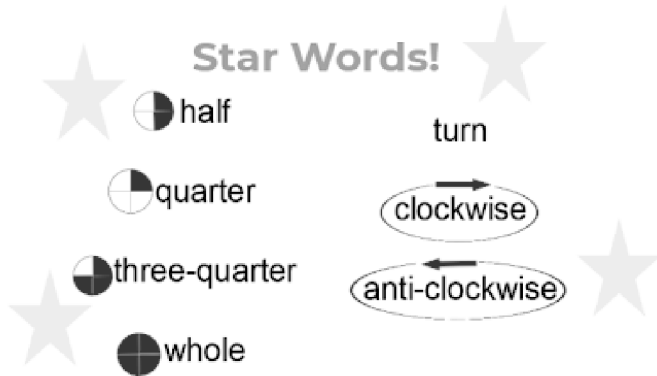


Name: _____

Date: _____

To identify half, quarter and three quarter turns

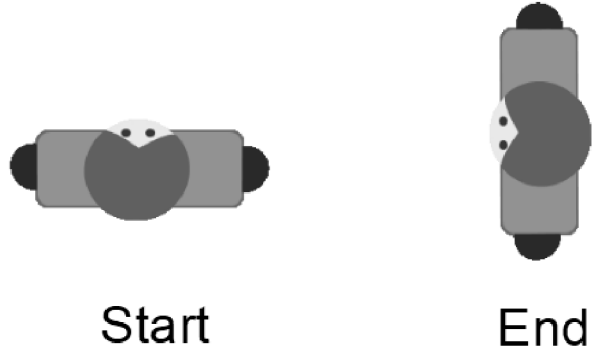
1: Which of the following would result in this end position?



Use these Star Words to help you in the quiz.

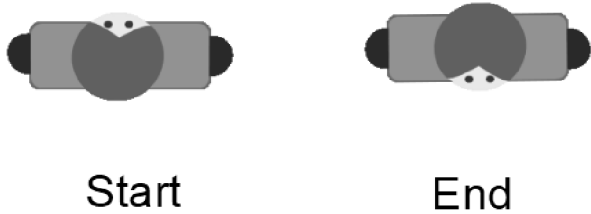
- A half turn anti-clockwise
- A quarter turn clockwise
- A quarter turn anti-clockwise

2: Which of the following would result in this end position?



- A quarter turn anti-clockwise
- A whole turn clockwise
- A half turn clockwise

3: Which of the following would result in this end position?



- A quarter turn clockwise
- A three quarter turn clockwise
- A half turn anti-clockwise

4: What direction has the man turned?



- A half turn clockwise
- A whole turn clockwise
- A quarter anti-clockwise

5: What direction has the man turned?



Start



End

- A half turn clockwise
- A three quarter turn anti-clockwise
- A quarter clockwise

Last updated: Tuesday, November 2, 2021 6:19 PM

